



The Profile View of a Dam



- A. The Ground
- B. The Front of the Dam
- C. The Top of the Dam
- D. The Inner part of the Dam

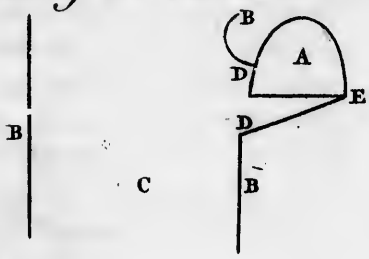
E { The Spot which the Earth is taken from to form the upper part of the Dam as D.B.

The Third Beaver Dam

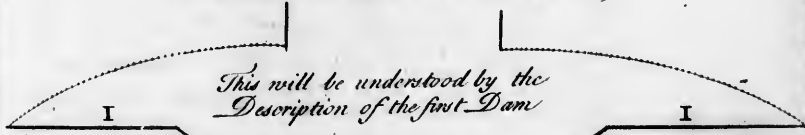


The Situation of the Beaver House

- A. The Beaver House
- B. The Shoars of the Creek
- C. The Creek
- (The French of each side the House with the Earth of which the House is built.
- D. Where the House joins to the Bank.




The Second Beaver Dam



I { Shows how far the Water Spreads

The First Beaver Dam



- A. The form of the Dam
- B. The dotted line expresses where the Earth was taken away that forms of Dam
- C. The Creek

- D. The Shoars of the Creek
- E. How far the water Spreads
- F. The Cut wth wants the water
- G. The Channel of water runs into